



**THE VILLAGE**  
INTERNATIONAL SCHOOL  
"We Nurture Dreams"

Class:4		Subject: Mathematics	Ref. Book:
Worksheet No: 1		Topic: Parts of a Circles	Type: (MCQ/SAQ/LAQ/Basic Understanding)
Date :			
Q. No	Questions		Teacher's sign
1	Identify the centre, radii and diameter of the circle		
2	If the radius of a circle is 4cm, find its diameter?		

Prepared by ,

Junior School Head: Ms.Jimmy Joseph



**THE VILLAGE**  
INTERNATIONAL SCHOOL  
"We Nurture Dreams"

Class:4		Subject: Mathematics	Ref. Book:
Worksheet No: 2		Topic: Drawing circles	Type: (MCQ/SAQ/LAQ/Basic Understanding)
Date :			
Q. No	Questions		Teacher's sign
1	Draw a circle of radius 3 cm?		
2	Draw a circle of diameter 8 cm?		

Prepared by ,

Junior School Head: Ms.Jimmy Joseph



**THE VILLAGE**  
INTERNATIONAL SCHOOL  
"We Nurture Dreams"



Class:4		Subject: Mathematics	Ref. Book:
Worksheet No: 3		Topic: Tangram	Type: (MCQ/SAQ/LAQ/Basic Understanding)
Date :			
Q. No	Questions		Teacher's sign
1	Form 3 different shapes using tangram?		

Prepared by ,

Junior School Head: Ms.Jimmy Joseph



**THE VILLAGE**  
INTERNATIONAL SCHOOL  
"We Nurture Dreams"


Class:4		Subject: Mathematics	Ref. Book:
Worksheet No: 4		Topic: Tiles	Type: (MCQ/SAQ/LAQ/Basic Understanding)
Date :			
Q. No	Questions		Teacher's sign
1	Draw the shapes used in tiling pattern ? 		
2	Does the following tile can fill in a rectangular room? 		

Prepared by ,

Junior School Head: Ms.Jimmy Joseph



**THE VILLAGE**  
INTERNATIONAL SCHOOL  
"We Nurture Dreams"

Class:4		Subject: Mathematics	Ref. Book:
Worksheet No: 5		Topic: Reflection	Type: (MCQ/SAQ/LAQ/Basic Understanding)
Date :			
Q. No	Questions		Teacher's sign
1	A .....is an image formed when you look into a mirror.		
2	Draw lines to cut the objects into their mirror halves. 		

Prepared by ,

Junior School Head: Ms.Jimmy Joseph